

Good Morning Ruby

Thursday, Term 4, Week 2

Reflect on how you are currently feeling?



Anger

To fight against problems



Fear

To protect us from danger



Anticipation

To look forward and plan



Surprise

To focus us on new situations



Joy

To remind us what's important



Sadness

To connect us with those we love



Trust

To connect with people who help



Disgust

To reject what is unhealthy

Journal Entry:

What is one object that is special to you and why?

Today's Routine: Wednesday 13th October 2021

Morning Block



Journal Writing



Reading



Spelling



Word of the day



Writing

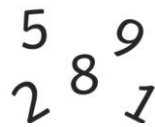


Recess

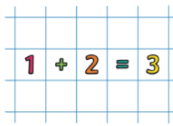


Crunch and Sip

Middle Block



Number of the day



Mentals



Time



Lunch

Afternoon Block



History

Reading and Comprehension: Super Six Focus- VISUALISING



Reading



Crunch and Sip

WALT

We are learning to...

Visualising

Description

Learners create a mental image from a text read/viewed/heard. Visualising brings the text to life, engages the imagination and uses all of the senses.

WILF

What I'm looking for...

Example questions/statements

Can you describe a picture or image you made in your head when you read the text?

Using getepic.com choose a book that interests you and challenges you. Whilst you are reading, I want you to create a picture in your head when you read the text. Don't forget to use your senses whilst you VISUALISE.

Read for 10 minutes. I will check student logs each day.

Draw what you VISUALISED.

Login info for Epic!
Using your device download the app or go to the website: getepic.com
Class Code: nng8295

Class Log In Instructions

Laptops

iOS/Android

Have your students open up their web browser and

- 1 Go to www.getepic.com/students
- 2 Enter class code
- 3 Select their name
[View and edit class roster](#)

Class Log In Instructions

Laptops

iOS/Android

After opening the Epic app, ask students to:

- 1 Tap on "STUDENTS"
- 2 Enter class code
- 3 Select their name
[View and edit class roster](#)

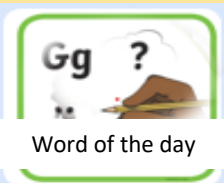
www.online-stopwatch.com

00:10:00₀₀₀

Start Clear

Click me!

Back



Word of the Day:

Select a word from your spelling list

Definition:

Part of speech:

- noun
- verb
- adjective
- adverb
- conjunction
- connective
- other

Segmenting:

Syllables: _____

Consonants: _____

Vowels: _____

Sounds: _____


Graphemes: _____

Antonym:

Synonym:

Sentence: (Put word in to an interesting sentence using correct parts of speech and punctuation)

Word Chain



BLM GM68

4 GM68

Word Chain



cht

4 GM68

your th

4 GM68

young verse

4 GM68



usu self

4 GM68

uni y

4 GM68

4 GM68

v ly

4 GM68

res ing

4 GM68

beauti day

4 GM68

ya ew

4 GM68

you al

4 GM68

beaut ster

4 GM68

4 GM68

year iew

dur

cue

4 GM68

yester ful

4 GM68

kn

Word Chain — a game for 2 to 4 students.

- 1 Students are dealt three cards each. The rest of the cards form a pick-up pile.
- 2 The first student places a card face up in the centre.
- 3 The next student joins on one of their cards to complete a **List Word**. If the student is unable to complete a word, they take a card from the pick-up pile.
- 4 When the pick-up pile finishes, any student who cannot complete a word misses a turn.
- 5 The first student to use all of their cards is the winner.



Writing- Sentence of the Day



Handwriting

WALT

We are learning to...

Improve our writing from using simple sentences to complex sentences

WILF

What I'm looking for...

A detailed sentence using interesting vocabulary.

Reflecting on yesterday's vocabulary mat about the polar bears, write a **simple sentence** and then improve your sentence by writing a **complex sentence**.

Simple Sentence

Complex Sentence

Writing:

WALT
We are learning to...

Find facts and
opinions in texts.

WILF
What I'm looking for...

Facts and
opinions sorted
into groups



Writing

A fact is what actually happened. It can be proven to be true. An opinion is a personal attitude or judgement about something.
Using a pencil and a ruler, underline the facts in green and opinions in red. Next, write 3 of each in the table.

Zebras

Lance Lawrence, a world-famous animal researcher, was recently interviewed about his studies on zebras. Mr. Lawrence has been studying zebras in Africa for over fifteen years. He believes that zebras are the most fascinating animals in the world.

"There are three different species of zebra: the plains zebra, the Grevy's zebras and the mountain zebras," Mr. Lawrence explained. "Plains zebras are the most common type. They live in the grasslands of eastern and southern Africa."

Mr. Lawrence feels that the zebra is a truly beautiful animal. "Zebras are famous for their black and white stripes," he explained during his interview. "Although the patterns can be very similar, no two zebras have exactly the same stripe. Their stripe patterns make them attractive to look at. The designs are enchanting!"



"Another interesting fact about zebras is that they sleep standing up," said Mr. Lawrence. "They only sleep when they are in large groups though, so they can be alerted of danger."

Zebras are one of the most valued African animals. We must look after them. We should also support researchers like Mr. Lawrence, who provide a wonderful insight into the lives of these creatures.

Facts	Opinions

RECESS

Whole Number: Number of the Day

5	8	9
2	8	7

Number of the day

Roll either a die or select playing cards to create your 3, 4 or 5 digit number day. Don't forget to try and challenge yourself! Upload your worksheet on SeeSaw

in words:

Represent the amount in dollars and cents
\$ _____ . _____ c

What is the value of the digits in the...?
1s column _____
10s column _____
100s column _____
1000s column _____

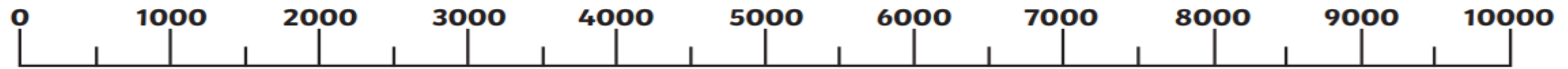
Round to:
the nearest 10: _____
the nearest 100: _____
the nearest 1000: _____

Today's Number Is...



<, > or =
 $12 \times 5 + 111$ today's number

Where is it? Draw an arrow on the number line:

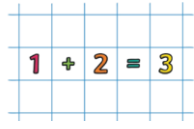


complete the sequence:
-1000 Today's number +1000 +1000

Subtract 912 _____
Add 912 _____

Is it in these times tables?
2 x 3 x 4 x 5 x 6 x 7 x
8 x 9 x 10 x 11 x 12 x

Maths Mentals



Mentals

Please complete the same colour list that you would if you were in class.

PURPLE

Wednesday

1. $15 + 7 =$ _____

2. $40 - 9 =$ _____

3. $19 + 45 =$ _____

4. $50 \div 10 =$ _____

5. $25 \div 5 =$ _____

6. Write the number showing 7 tens and 6 ones. _____

7. Complete this counting pattern:

97, 102, 107, 112, _____, _____

8. If there were 127 fans at a rugby league game, 63 were wearing green and the rest were wearing red, how many were wearing red? _____


9. Share \$50 between 10 children. _____

10. $50 \text{ cents} + \$2.00 + 10 \text{ cents} =$ _____

11. Colour in a quarter of this shape:

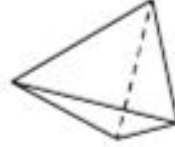


12. Colour in an eighth of these triangles.



13. 1 week = _____ days

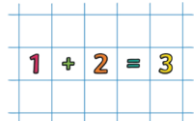
14. How many faces does a triangle-based pyramid have? _____



15. Which circle has the lowest chance of being selected? Black or white? _____



Maths Mentals



Mentals

Please complete the same colour list that you would if you were in class.

YELLOW

Wednesday

1. $51 + 33 =$ _____

2. $96 - 7 =$ _____

3. $51 - 6 =$ _____

4. $48 \div 4 =$ _____

5. $12 \times 2 =$ _____

6. Write these numbers in ascending order: 4334, 2772, 1716, 4046, 4606, 2241.

7. Complete this counting pattern:

4, 8, 12, 16, _____, _____, _____

8. In a group of 46 students, 3 would like to play football and the rest want to play netball. How many want to play netball? _____

9. Divide 14 by 7. _____

10. $\$2.00 + 20 \text{ cents} + 10 \text{ cents} =$ _____

11. $20 \text{ cents} + \$2.00 + \$2.00 =$ _____

12. How many hours is 360 minutes? _____

13. 360 minutes = _____ hours

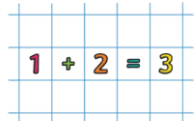
14. A rectangular prism has _____ corners.



15. Which star has the highest chance of being selected? Black or white? _____



Maths Mentals



Mentals

Please complete the same colour list that you would if you were in class.

GREEN

Wednesday

1. $15 + 7 =$ _____

2. $40 - 9 =$ _____

3. $19 + 45 =$ _____

4. $50 \div 10 =$ _____

5. $25 \div 5 =$ _____

6. Write the number showing 7 tens and 6 ones. _____

7. Complete this counting pattern:

97, 102, 107, 112, _____, _____, _____

8. If there were 127 fans at a rugby league game, 63 were wearing green and the rest were wearing red, how many were wearing red? _____

9. Share \$50 between 10 children. _____

10. $50 \text{ cents} + \$2.00 + 10 \text{ cents} =$ _____

11. Colour in a quarter of this shape:



12. Colour in an eighth of these triangles.



13. 1 week = _____ days

14. How many faces does a triangle-based pyramid have? _____



15. Which circle has the lowest chance of being selected? Black or white? _____

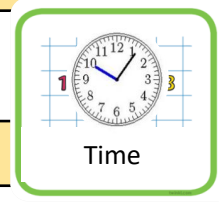


Maths- Number- Multiplication

Practice your 7 times table. Either write them down, say them out loud or ask an adult to quiz you with some 7 times table questions.

e.g. What does $7 \times 7 =$
 What does $7 \times _ = 21$

Maths- Measurement and Geometry: Time



WALT
We are learning to...

read and interpret a bus timetable

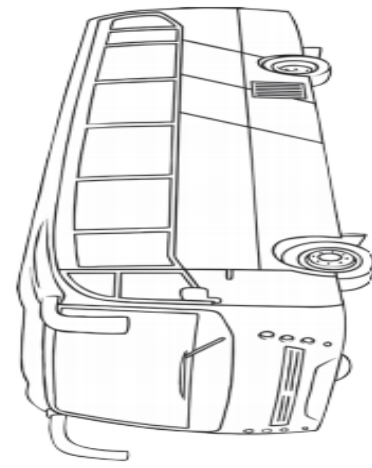
WILF
What I'm looking for...

Ability to locate the correct time on a table and use this information to answer questions.

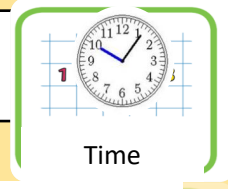
Read over the bus timetable below and then answer the questions on the following slide.

Use the Twinklville Bus Timetable to answer each question.

Twinklville Bus Timetable										
Major Stops	Twinkl Street	Star Street	Twinkl City	Cloud Court	Twinkl Beach	Sunny Avenue	Cloud Court	Twinkl City	Star Street	Twinkl Street
Stop reference	E	F	A	B	C	D	B	A	F	E
Bus Route	Monday to Friday									
501 (am)	9:10	9:20	9:40	9:55	10:05	10:10	10:25	10:40	11:00	11:10
501 (pm)	12:00	12:10	12:30	12:45	12:55	1:00	1:15	1:30	1:50	2:00
Bus Route	Saturday to Sunday									
501 (am)	8:30	8:40	9:00	9:15	9:25	9:30	9:45	10:00	10:20	10:30
501 (pm)	12:30	12:40	1:00	1:15	1:25	1:30	1:45	2:00	2:20	2:30
Approx Travel Time	10 min.	10 min.	15 min.	15 min.	5 min.	15 min.	15 min.	20 min.	10 min.	10 min.



Maths- Measurement and Geometry: Time



Time

1. Can you catch a bus at 9:10 on Sunday?
2. What times can you catch the bus from Twinkl Beach?
3. How long does it take to travel between Twinkl Beach and Sunny Avenue?
4. What is the earliest time you can catch a bus from Twinkl Street on a Saturday?
5. How many destinations does the bus travel to?
6. If you were hopping on the bus at 1pm on a Tuesday, which stop would you be at?
7. If you were getting off the bus at 12:10 on a Thursday, which stop would you be at?
8. What bus number would you need to catch on a Wednesday morning?
9. What stop reference is 'F'?
10. How many days a week does the bus operate?

LUNCH

History:



WALT
We are learning to...

understand the systems of government within Australia and discuss how we united as a nation.

WILF
What I'm looking for...

successfully demonstrate your understanding of systems of government and to explain your research

EXPLORE THE ORIGINS OF
OUR SYSTEM OF NATIONAL
GOVERNMENT AND
DISCOVER THE KEY FIGURES
AND REASONS FOR
UNITING AS A NATION.

History



Watch and listen to the BTN Clip [What is Democracy?](https://www.abc.net.au/btn/classroom/what-is-democracy/10524786)

<https://www.abc.net.au/btn/classroom/what-is-democracy/10524786>

ANSWER THE FOLLOWING Questions...

What is a democracy?

What type of democratic system do we have in Australia?

Why is it important for the people of Australia to have a voice?
