

# Year 1 - Fact families - harder

## Related Facts

9a. Tick the calculation that is not a related fact.

A.  $14 + 3 = 17$

B.  $3 + 14 = 17$

C.  $18 - 4 = 14$

D.  $17 - 14 = 3$

VF

## Related Facts

9b. Tick the calculation that is not a related fact.

A.  $7 + 5 = 12$

B.  $5 + 7 = 12$

C.  $12 - 5 = 7$

D.  $12 - 3 = 9$

VF

10a. Use the digit cards to complete two related facts.

13
4
17

+  =

-  =

VF

10b. Use the digit cards to complete two related facts.


11
16
5

+  =

-  =

VF

11a. Complete two calculations to match the bar model.




+  =

-  =

VF

11b. Complete two calculations to match the bar model.

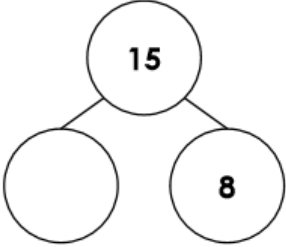


+  =

-  =

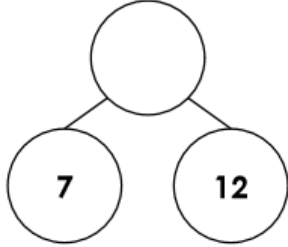
VF

12a. Complete the part-whole model and write four calculations to match.



VF

12b. Complete the part-whole model and write four calculations to match.



VF